

1) Consider the data below which represents the number of public libraries in select states.

{53, 60, 84, 85, 97, 119, 128, 140, 230, 267, 296}

a) (3 points) Find the mean of the data:

$$\bar{x} = \frac{53 + 60 + 84 + \dots + 296}{11}$$

$$\bar{x} \approx 141.73$$

b) (3 points) Find the median of the data:

90 119

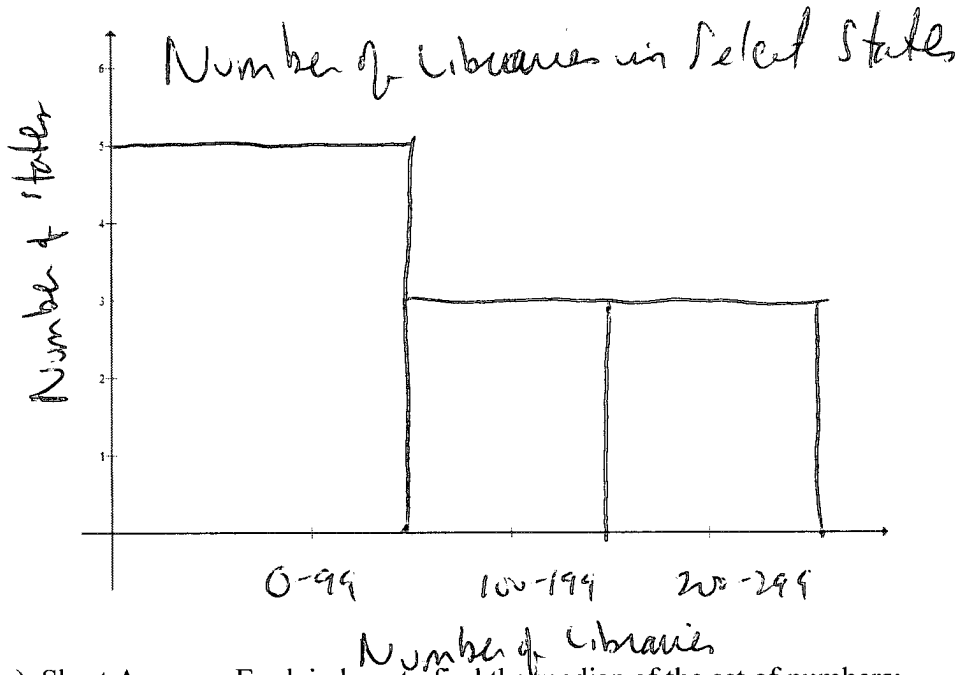
c) (3 points) Find the mode of the data:

None!

d) (3 points) Find the range of the data:

$$296 - 53 = 243$$

e) (4 points) Draw and label a histogram. Use the classes 0 – 99, 100 – 199, and 200 – 299:



2) (2 points) Short Answer: Explain how to find the median of the set of numbers:

Hmmmm...

16

3) (3 points) Alice Student is taking 5 courses this semester:

*Running Underwater*—2 credit hours—Grade: A    *Quiet Tap Dance*—3 credit hour—Grade: C  
*Who Really Let the Dogs Out*—4 credit hours—Grade: B    *Tag*—2 credit hours—Grade: A  
*Defense Against the Dark Arts*—3 credit hours—Grade: A

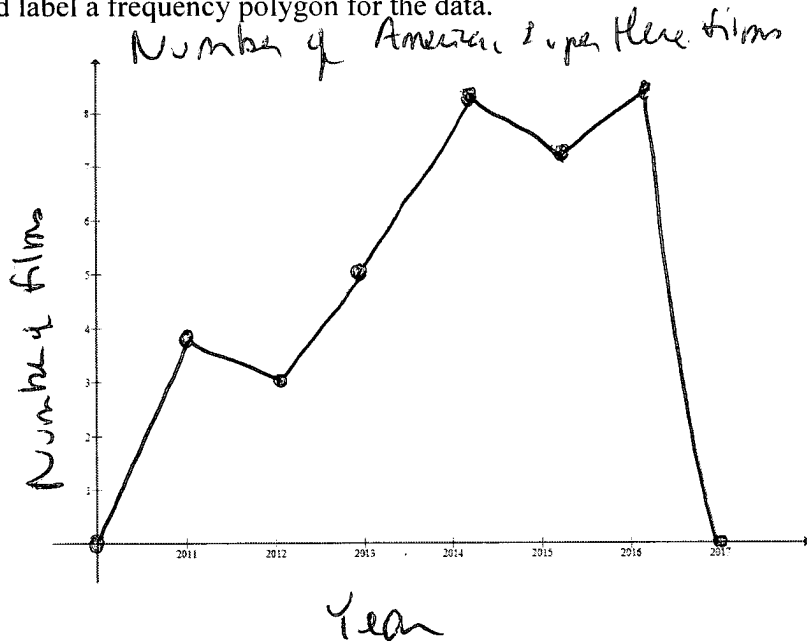
Assuming that a grade of an 'A' is worth 4 point, grade of a 'B' is worth 3 points, and a grade of a 'C' is worth 2 points, determine Alice's grade point average for the semester rounded to two decimal places:

$$46 \leftarrow \frac{2 \cdot 4 + 3 \cdot 2 + 4 \cdot 3 + 2 \cdot 4 + 3 \cdot 4}{2 + 3 + 4 + 2 + 3} \approx \boxed{3.29}$$

14 ←

4) (4 points) The following chart shows number of American super hero movies that arrived in a theater near you. Draw and label a frequency polygon for the data.

Year	Number of American Super Hero Films
2011	4
2012	3
2013	5
2014	8
2015	7
2016	8



5) (3 points each) Suppose there are 2,000 people at a concert and the ages of the people are normally distributed with a mean of 45 years and a standard deviation of 8 years.

a) What **percent** of people are younger than 37 years?

$$0.15 + 2.35 + 13.5\% = 16\%$$

(w/ z-score, the answer is 15.87%)

b) What **number** of people are older than 61 years?

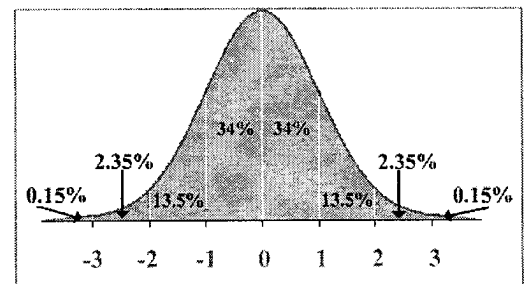
$$2.35 + 0.15\% = 2.5\%$$

$$2.5\% \text{ of } 2000 = 50 \text{ people}$$


---

w/ z-score, the percent is 2.28%

$$2.28\% \text{ of } 2000 = 45.6 \text{ people}$$



21 29 37 45 53 61 69

6) (4 points each) The average lifespan of the You Light Up My Life light bulb is 34 years with a standard deviation of 6 years. Suppose a You Light Up My Life light bulb was randomly picked. What is the probability that it will work:

a) Less than 25 years?

$$z = \frac{25 - 34}{6} = -1.50$$

6.68%

b) At least 39 years?

$$z = \frac{39 - 34}{6} = 0.83$$

100 - 79.67% = 20.33%

c) Less than 30 years or more than 40 years?

$$z = \frac{40 - 34}{6} = 1.00$$

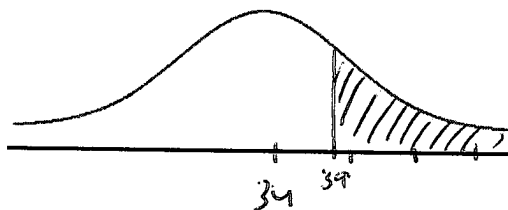
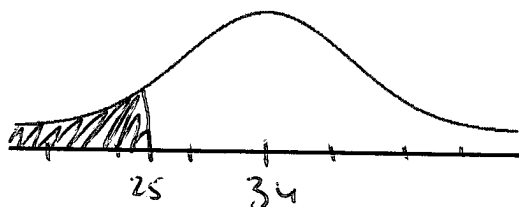
$$z = \frac{30 - 34}{6} = -0.67$$

100 - 24.13% = 75.87%  
 25.14% = 41.01%  
 ↳ add

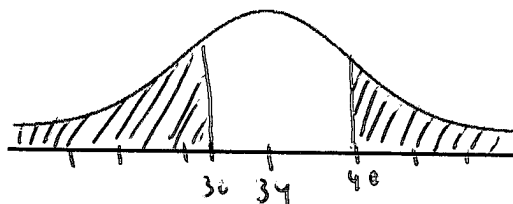
7) (2 points each) For each problem in 6 above, shade in the normal distribution curve. Be sure to label the x-axis with the appropriate numbers. Also, mark the mean on each graph:

a) Less than 25 years?

b) At least 39 years?



c) Less than 30 years or more than 40 years?



18  
48